










Bryd billedkoden og løs regnestykkerne.

								
4	2	9	5	7	1	8	6	3

$$\text{castle} + \text{lemons} = \square$$

$$\text{eye} + \text{car} = \square$$

$$\text{eye} + \text{chicken} = \square$$

$$\text{bull head} + \text{lips} = \square$$

$$\text{lips} + \text{lips} = \square$$

$$\text{lemons} + \text{car} = \square$$

$$\text{lemons} + \text{car} = \square$$

$$\text{chicken} + \text{lips} = \square$$










$$\text{bull head} + \text{bull head} = \square$$

$$\text{car} + \text{lemons} = \square$$

$$\text{lips} + \text{bull head} = \square$$

$$\text{fire} + \text{lemons} = \square$$

Bryd billedkoden og løs regnestykkerne.

								
4	2	9	5	7	1	8	6	3

$$\text{Castle} + \text{Lemons} = \boxed{8}$$

$$\text{Eye} + \text{Car} = \boxed{9}$$

$$\text{Eye} + \text{Chicken} = \boxed{8}$$

$$\text{Bull's head} + \text{Lips} = \boxed{6}$$

$$\text{Lips} + \text{Lips} = \boxed{4}$$

$$\text{Lemons} + \text{Car} = \boxed{7}$$

$$\text{Lemons} + \text{Car} = \boxed{7}$$

$$\text{Chicken} + \text{Lips} = \boxed{7}$$

$$\text{Bull's head} + \text{Bull's head} = \boxed{8}$$

$$\text{Car} + \text{Lemons} = \boxed{7}$$

$$\text{Lips} + \text{Bull's head} = \boxed{6}$$

$$\text{Fire} + \text{Lemons} = \boxed{9}$$