










Bryd billedkoden og løs regnestykkerne.

								
2	5	1	8	7	3	6	9	4

$$\text{Cow} + \text{Crescent moon} = \square$$

$$\text{Dolphin} + \text{Banana} = \square$$

$$\text{Banana} + \text{Crescent moon} = \square$$

$$\text{Baby} + \text{Crescent moon} = \square$$

$$\text{Mosquito} + \text{Baby} = \square$$

$$\text{Turtle} + \text{Baby} = \square$$

$$\text{Cow} + \text{Cow} = \square$$

$$\text{Seahorse} + \text{Banana} = \square$$










$$\text{Crescent moon} + \text{Baby} = \square$$

$$\text{Baby} + \text{Turtle} = \square$$

$$\text{Crescent moon} + \text{Banana} = \square$$

$$\text{Banana} + \text{Mosquito} = \square$$

Bryd billedkoden og løs regnestykkerne.

								
2	5	1	8	7	3	6	9	4

$$\text{Cow} + \text{Crescent moon} = 7$$

$$\text{Dolphin} + \text{Banana} = 9$$

$$\text{Banana} + \text{Crescent moon} = 4$$

$$\text{Baby} + \text{Crescent moon} = 5$$

$$\text{Mosquito} + \text{Baby} = 7$$

$$\text{Turtle} + \text{Baby} = 9$$

$$\text{Cow} + \text{Cow} = 8$$

$$\text{Seahorse} + \text{Banana} = 7$$

$$\text{Crescent moon} + \text{Baby} = 5$$

$$\text{Baby} + \text{Turtle} = 9$$

$$\text{Crescent moon} + \text{Banana} = 4$$

$$\text{Banana} + \text{Mosquito} = 6$$