










Bryd billedkoden og løs regnestykkerne.

								
7	1	2	4	5	3	6	8	9

$$\text{Lemon} + \text{Lemon} = \square$$

$$\text{Seahorse} + \text{Frog} = \square$$

$$\text{Bee} + \text{Lemon} = \square$$

$$\text{Frog} + \text{Frog} = \square$$

$$\text{Rose} + \text{Lemon} = \square$$

$$\text{Submarine} + \text{Seahorse} = \square$$

$$\text{Eye} + \text{Seahorse} = \square$$

$$\text{Goat} + \text{Lemon} = \square$$






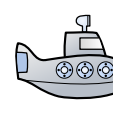



$$\text{Seahorse} + \text{Eye} = \square$$

$$\text{Lemon} + \text{Seahorse} = \square$$

$$\text{Frog} + \text{Lemon} = \square$$

$$\text{Submarine} + \text{Submarine} = \square$$

Bryd billedkoden og løs regnestykkerne.

								
7	1	2	4	5	3	6	8	9

$$\text{Lemon} + \text{Lemon} = \boxed{2}$$

$$\text{Seahorse} + \text{Frog} = \boxed{6}$$

$$\text{Bee} + \text{Lemon} = \boxed{7}$$

$$\text{Frog} + \text{Frog} = \boxed{8}$$

$$\text{Rose} + \text{Lemon} = \boxed{9}$$

$$\text{Submarine} + \text{Seahorse} = \boxed{5}$$

$$\text{Eye} + \text{Seahorse} = \boxed{7}$$

$$\text{Goat} + \text{Lemon} = \boxed{8}$$

$$\text{Seahorse} + \text{Eye} = \boxed{7}$$

$$\text{Lemon} + \text{Seahorse} = \boxed{3}$$

$$\text{Frog} + \text{Lemon} = \boxed{5}$$

$$\text{Submarine} + \text{Submarine} = \boxed{6}$$