










Bryd billedkoden og løs regnestykkerne.

								
4	9	2	1	8	7	6	5	3

$$\text{Tree} + \text{Fairy} = \square$$

$$\text{Eagle} + \text{House} = \square$$

$$\text{Scissors} + \text{Tree} = \square$$

$$\text{Whale} + \text{Tree} = \square$$

$$\text{Snail} + \text{Eagle} = \square$$

$$\text{Fairy} + \text{Eagle} = \square$$

$$\text{Tree} + \text{Scissors} = \square$$

$$\text{Snail} + \text{House} = \square$$










$$\text{Horse} + \text{Tree} = \square$$

$$\text{House} + \text{Snail} = \square$$

$$\text{Fairy} + \text{Fairy} = \square$$

$$\text{Eagle} + \text{Tree} = \square$$

Bryd billedkoden og løs regnestykkerne.

								
4	9	2	1	8	7	6	5	3

$$\text{Tree} + \text{Fairy} = 5$$

$$\text{Eagle} + \text{House} = 8$$

$$\text{Scissors} + \text{Tree} = 7$$

$$\text{Whale} + \text{Tree} = 8$$

$$\text{Snail} + \text{Eagle} = 5$$

$$\text{Fairy} + \text{Eagle} = 7$$

$$\text{Tree} + \text{Scissors} = 7$$

$$\text{Snail} + \text{House} = 7$$

$$\text{Horse} + \text{Tree} = 9$$

$$\text{House} + \text{Snail} = 7$$

$$\text{Fairy} + \text{Fairy} = 8$$

$$\text{Eagle} + \text{Tree} = 4$$