










Bryd billedkoden og løs regnestykkerne.

								
9	6	3	8	2	1	7	4	5

$$\text{Basketball} + \text{Jester} = \square$$

$$\text{Whale} + \text{Jester} = \square$$

$$\text{Snail} + \text{Snail} = \square$$

$$\text{Octopus} + \text{Basketball} = \square$$

$$\text{Castle} + \text{Snail} = \square$$

$$\text{Jester} + \text{Castle} = \square$$

$$\text{Skull} + \text{Octopus} = \square$$

$$\text{Snail} + \text{Octopus} = \square$$










$$\text{Apple} + \text{Apple} = \square$$

$$\text{Octopus} + \text{Octopus} = \square$$

$$\text{Jester} + \text{Basketball} = \square$$

$$\text{Apple} + \text{Apple} = \square$$

Bryd billedkoden og løs regnestykkerne.

								
9	6	3	8	2	1	7	4	5




+



=

7



+



=

9




+



=

6



+



=

6



+



=

9



+




=

8



+




=

9




+




=

4




+




=

8



+



=

2




+




=

7



+



=

8