
















Bryd billedkoden og løs regnestykkerne.

								
3	2	8	1	6	9	7	5	4



 +  =

 +  =



 +  =



 +  =



 +  =



 +  =



 +  =

 +  =










 +  =

 +  =

 +  =

 +  =

Bryd billedkoden og løs regnestykkerne.

								
3	2	8	1	6	9	7	5	4

$$\text{shoe} + \text{castle} = \boxed{6}$$

$$\text{castle} + \text{fish} = \boxed{7}$$

$$\text{moon} + \text{campfire} = \boxed{5}$$

$$\text{campfire} + \text{castle} = \boxed{3}$$

$$\text{castle} + \text{campfire} = \boxed{3}$$

$$\text{envelope} + \text{castle} = \boxed{8}$$

$$\text{fish} + \text{moon} = \boxed{9}$$

$$\text{dog} + \text{shoe} = \boxed{9}$$

$$\text{skull} + \text{castle} = \boxed{9}$$

$$\text{dog} + \text{dog} = \boxed{8}$$

$$\text{campfire} + \text{campfire} = \boxed{4}$$

$$\text{moon} + \text{shoe} = \boxed{8}$$